



V SEMESTER B.TECH (CIVIL) END SEMESTER EXAMINATIONS  
 DECEMBER 2020

SUBJECT: **ANALYSIS OF INDETERMINATE STRUCTURES [CIE 3151]**

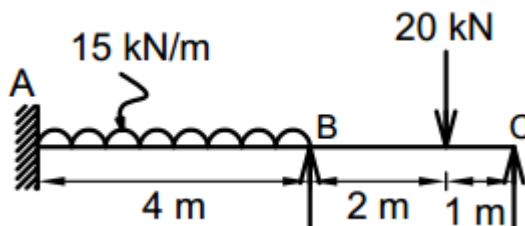
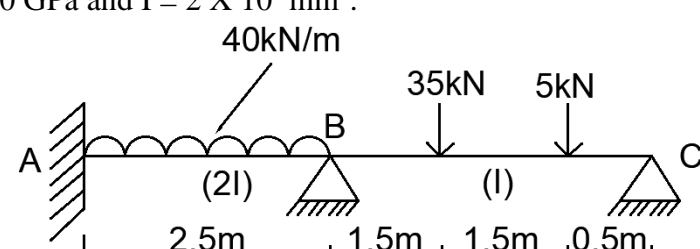
Date of Exam:

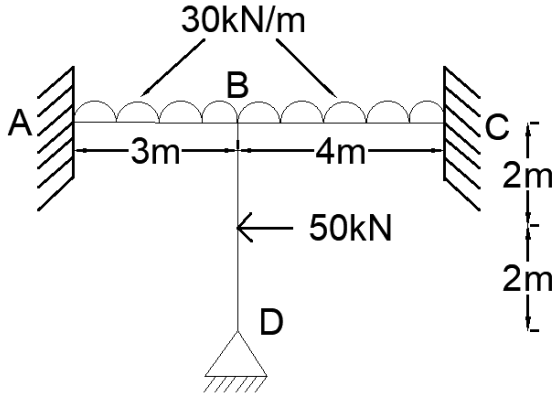
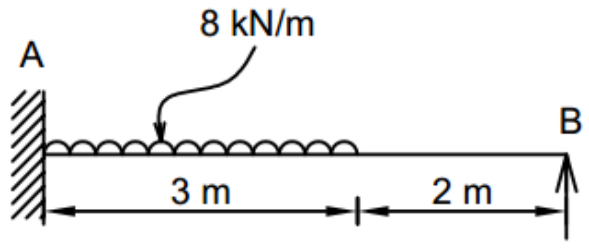
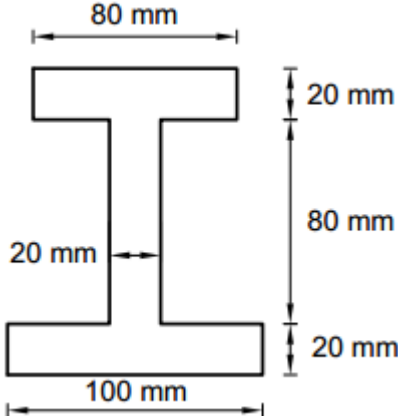
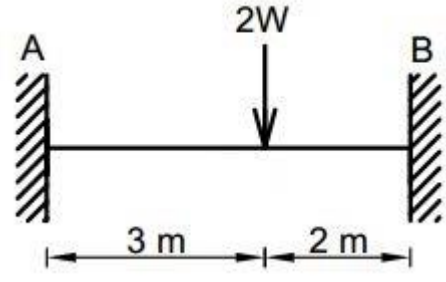
Time of Exam:

Max. Marks: **50**

**Instructions to Candidates:**

❖ Answer ALL the questions & missing data may be suitably assumed

1A.	<p>Analyse the continuous beam ABC shown in the figure using Clapeyron's theorem. Draw BMD.</p> 	5
1B.	<p>A two hinged parabolic arch of rise 'h' and span 'l' is loaded with an udl of 'w' kN/m over the left/right half of the span. Show that horizontal thrust developed at the hinges is equal to <math>(wl^2/16h)</math>.</p>	3
1C.	<p>A single rolling load of 20kN, rolls along a girder of 25m span. Draw SFD for maximum positive and negative values.</p>	2
2A.	<p>Analyse the continuous beam ABC shown in the figure for support moments using slope-deflection method if supports B and C sink by 10mm and 20mm respectively. Consider <math>E = 210 \text{ GPa}</math> and <math>I = 2 \times 10^8 \text{ mm}^4</math>.</p> 	5

2B.	<p>Analyse the frame ABCD shown in the figure using moment distribution method for support moments.</p> 	3
2C.	<p>Define the terms w.r.t moment distribution method</p> <p>a) Carry over factor      b) Distribution factor</p>	2
3A.	<p>Determine the support reaction at B for a propped cantilever beam AB shown in the figure using Castigliano's second theorem. Draw BMD.</p> 	5
3B.	<p>Determine the shape factor for an I section shown in the figure.</p> 	3
3C.	<p>Determine the collapse load for a fixed beam AB shown in the figure using principle of virtual work. Assume <math>M_P</math> as constant throughout.</p> 	2



4A.	<p>Determine the structural stiffness matrix for a frame ABCD shown in the figure using stiffness method.</p>	5
4B.	<p>Derive the stiffness matrix for a cantilever beam AB shown in the figure using first principle.</p>	3
4C.	<p>Derive the relationship between flexibility and stiffness of a material.</p>	2
5A.	<p>Determine the structural stiffness matrix for a continuous beam ABC shown in the figure using stiffness matrix method.</p>	4
5B.	<p>Define (a) Influence line diagram (b) Muller Breslau principle</p>	2
5C.	<p>Determine support reactions for a fixed beam AB shown in the figure using Consistent deformation method.</p>	4